



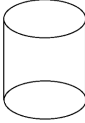
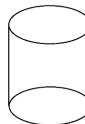
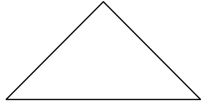
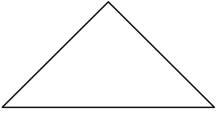

SEPTEMBER - GRADE ONE

MONDAY	TUESDAY	WEDNESDAY	THURSDAY	FRIDAY
Count as far as you can. I counted to ____!	Print the numbers 1 to 10. Practice the tricky ones!	Find things in your house that are shaped like a square. What are some attributes of a square?	Locate and count all the clocks in your house. How many do you have?	Say the days of the week to someone. How many days are there in a week?
What are the months of the year?	Count backwards from 10 to 1.	How many things can you find around your house that are round?	Count by 10s to 100. What other ways can you count to 100?	Help set the dinner table. How many plates, forks, knives and cups do you need?
Count to 30. Can you jump 30 times?	Solve: $10 + 3 =$	There were 5 frogs on a lily pad. 6 more frogs joined in. How many frogs were there altogether?	Use snaps and claps to show these patterns. AABB AABB AB AB ABBA ABBA	Show the number 10 in as many ways as you can.
Create your own pattern and tell someone about it.	Create an ABBC pattern with cereal or other objects.	How many addition questions can you make that equal 14?	Draw a number line from 1 to 10.	Count as far as you can. I can count to ____.




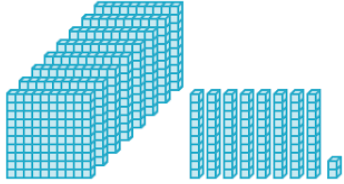



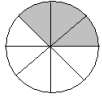
OCTOBER - GRADE ONE

MONDAY	TUESDAY	WEDNESDAY	THURSDAY	FRIDAY
Draw a rectangle. How many sides does it have?	Solve $12 + 6 =$ $6 + 12 =$	Skip count as high as you can by 2.	How many days are in a week? Name them.	How many days are in a year?
Which number is 1 more than 15?	How do you make 5?	Fill in the number line. ←+++++++→	There are 2 cars. How many tires in total?	Add $1 + 2 + 3 =$
How many letters are there in the sentence below? "My mom loves spaghetti."	Subtract $6 - 2$. What is the answer?	How many witch hats do you see below? 	 Write an addition sentence that could be used to represent the picture above.	Add $3 + 3$. Draw a picture to show your work.
John bought 5 pumpkins. Jane bought 4. How many pumpkins did they buy all together?	Subtract $6 - 4 =$	Count backwards from 10 to 1.	How many are in a dozen?	How many ways can you make 10?


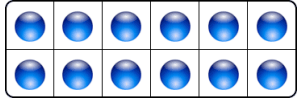


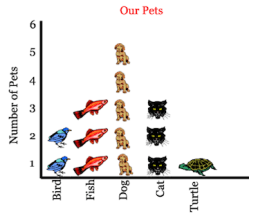

NOVEMBER - GRADE ONE

MONDAY	TUESDAY	WEDNESDAY	THURSDAY	FRIDAY
What number is 9 more than 12?	Anna received 8 candies from her mom. She only has 2 left. How many did she eat?	How much is half of 10?	Which numbers are greater than 11? 13, 11, 9, 6, 24, 0	How many words are in this question?
$5 + 6 =$ Are there any other ways to make 11?	Name as many 4 sided shapes as possible.	What is this shape called? 	How many faces does this shape have? 	What is this shape called? 
How many sides does this shape have? 	Jason earned 3 stars on Monday. On Tuesday, Jason earned 5 stars. How many stars did he earn in total?	Find 4 socks. Choose different colours. What colour is 1st? 2nd? 3rd? 4th?	There are 3 kittens. How many tails and ears are there in total?	Draw a picture to show $2 + 5 + 6$. What is the answer?
Draw a die (square) with 6 dots inside.	One pack of pencils has 6 inside. Another pack has 4. How many pencils in total?	How many fruits are in the bowl? 	What number comes before 9?	Count to 50. Can you count by 1s and 10s?

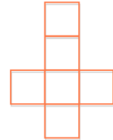
DECEMBER - GRADE ONE

MONDAY	TUESDAY	WEDNESDAY	THURSDAY	FRIDAY
<p>Which animal is second from the right?</p> 	<p>What is the sum of 3 nickels?</p> 	<p>What number is 4 greater than 6?</p>	 <p>Estimate the number of gumballs.</p>	<p>Solve:</p> $12 + 12 =$
<p>Find 3 circular items in your home. Show someone the items you selected and tell them what you know about circular shapes.</p>	<p>How many letters are in the word BARRHAVEN</p>	<p>How many dimes make 30 cents?</p>	 <p>What number do these blocks represent?</p>	 <p>What time is it?</p>
<p>Sort your socks. Tell someone your sorting rule.</p>	 <p>Which is the next shape in the pattern?</p> 	 <p>How many sections are shaded? How many sections are there in total?</p>	$2 + \underline{\quad} = 8$ <p>How did you find your answer?</p>	<p>Jesse is 15 years old. His brother, Nathan, is 10. How many years older is Jesse?</p>
<p>How many letters are in your first and last name?</p>	<p>How many years are in a decade?</p>	<p>What are the months of the year?</p>	<p>School starts at 9:00 AM. English class begins 1 hour later. What time does English class start?</p>	<p>Andrea invited 10 kids to her birthday party. They each had 2 slices of pizza. How many slices were eaten?</p>

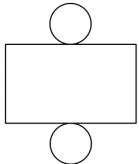
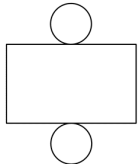





JANUARY - GRADE ONE

MONDAY	TUESDAY	WEDNESDAY	THURSDAY	FRIDAY
How many ways can you show the number 30?	What day is before Saturday? What day is after Saturday?	 <p>How many scoops of ice cream?</p>	Circle the even numbers listed below. 4, 7, 12, 15, 1, 9	How many? 
What is half of 12? How do you know?	Which object weighs more?  	Count the number of shoes in your closet. Show how many you have with tally marks.	Count by 10s to 100. What other ways can you count to 100?	How many things can you find around your house that are square?
Count and print numbers to 20.	There were 6 lollipops in a cup. There were 13 lollipops in a bowl. How many were there all together?	Fill in the missing numbers. 1, ____, 3, ____, 5	 <p>Which pet is most popular?</p>	 <p>What colour comes next?</p>
Count forward to 100 in as many ways as possible.	$4 + 9 =$ $6 + 4 =$ $12 + 7 =$ $12 + 15 =$	Look around your home for objects that are 3 dimensional. List as many as you can and record your findings.	What number comes after 59?	Measure your kitchen table with spoons. Share your findings with your family.







FEBRUARY - GRADE ONE

MONDAY	TUESDAY	WEDNESDAY	THURSDAY	FRIDAY
Name the four seasons.	Write your own math story problem and solve it.	Practice printing numbers 1 to 50.	Put these numbers in order from least to greatest: 43, 13, 36, 42, 24	Draw a number line from 1-20.
Write out the days of the week in order.	Help your family set the table for dinner. How many chairs would you need if you had 4 guests over.	Write 3 different ways to make 20 cents.	How many cents are in 1 dollar (1 loonie)?	How much money is in your piggy bank? Count it.
$15 - 5 =$ $25 - 4 =$ $6 - 4 =$ $100 - 50 =$	If you are playing with 3 friends and your mom brings out 12 cupcakes, how many can each of you have?	Count backwards from 100 to 1.	Count the number of clocks in your home. How many of them are analog? How many are digital?	Write a survey question. Ask 10 people your question. Use tally marks to document your findings.
Show the number 55 in as many ways as possible.	Use snaps and claps to show these patterns. AABB AABB AB AB ABBA ABBA	Make an AB pattern with some items in your home.	Name the 3D shape that matches this net? 	Can you do 50 jumping jacks? Count as you do them.







MARCH - GRADE ONE

MONDAY	TUESDAY	WEDNESDAY	THURSDAY	FRIDAY
 <p>What 3D shape does this make?</p>	 <p>How many faces does this 3D shape have?</p>	<p>What is the likelihood of a it snowing in July?</p> <p>likely or unlikely</p>	 <p>What is the number rolled on the dice?</p>	<p>Roll your own set of dice four times, and count the number of dots.</p>
<p>What colour will the arrow most likely land on?</p> 	$6 - 2 =$ $15 - 3 =$ $16 + 8 =$ $19 - 5 =$	<p>How many ways can you show the number 100?</p>	<p>Create a pattern using items in your home. Label your pattern with letters.</p>	 <p>Draw the line of symmetry on this heart?</p>
 <p>Write an equation that the clovers could represent.</p>	<p>Draw a picture that shows</p> $29 - 6 =$	<p>Sally and Sarah are sharing a pizza with 12 slices. How many slices can they each have?</p> 	<p>How many addition questions can you make that equal 20?</p>	<p>Circle the ODD numbers:</p> <p>1, 5, 2, 13, 4, 10, 22</p>
<p>Count to 30 by 1s and 2s.</p>	<p>How many letters are there in this sentence?</p>	<p>6 frogs are playing on a lily pad. 2 jump off. How many are left?</p>	<p>What is half of 20?</p>	<p>Draw a picture that shows symmetry.</p>


APRIL - GRADE ONE

MONDAY	TUESDAY	WEDNESDAY	THURSDAY	FRIDAY
<p>What is half of 30?</p>	<p>What is the pattern rule?</p> <p>2, 4, 6, 8, 10</p>	<p>____ + 6 = 12</p> <p>5 + 0 =</p> <p>2 + 1 =</p> <p>12 + 12 =</p>	<p>What are all the ways to make ten?</p> <p>10 + 0 = 10</p> <p>9 + 1 = 10</p> <p>etc...</p>	 <p>Write an addition sentence to describe this picture.</p>
<p>Draw a picture that shows</p> <p>25 - 6</p>	 <p>How many flowers are there in total?</p>	<p>How many legs does this spider have?</p> 	<p>There are 2 bicycles, 4 cars and 6 trucks. How many wheels are there in total?</p>	<p>The tooth fairy collected 61 teeth on Monday night. She collected 3 more on Tuesday. How many in total?</p>
 <p>How many bunny ears in total?</p>	<p>Write two numbers greater than 7. How do you know?</p>	<p>"Greater Than" Symbol</p>  <p>What symbol could you use in between these two numbers?</p> <p>59 37</p>	<p>How many people are in your family? How many legs in total?</p> 	<p>What is your favourite number? Show it in as many ways as you can. (pictures, numbers, words)</p>
<p>1 + 6 =</p> <p>25 + 5 =</p> <p>14 + 7 =</p>	<p>What number is 6 more than 26?</p>	<p>What number is 25 less than 100?</p>	<p>32 - 9 =</p> <p>65 - 40 =</p> <p>9 - 5 =</p>	<p>How many pairs of socks do you have? How many socks in total?</p>

MAY - GRADE ONE

MONDAY	TUESDAY	WEDNESDAY	THURSDAY	FRIDAY
Calvin has 12 cookies and 3 friends. How can he share his cookies equally?	There are 4 tulips in Michelle's garden. She picked 3 of those tulips to put in a vase. How many are left in the garden?	Draw a pattern using 4 different colours.	 <p>Do you see any patterns?</p>	 <p>About how many paper clips are in the jar?</p>
$5 + 7 =$ $5 + 8 =$ $5 + 9 =$ $5 + 10 =$	 <p>What is the name of this shape? What do you know about it?</p>	How old are you? Show your age in pictures, numbers and words.	 <p>Name as many 2D shapes as possible.</p>	Use base ten blocks to show your parent's ages.
 <p>If this is the pattern core, what comes next?</p>	 <p>How many people can have a piece of pie? Explain.</p>	$25 - 3 =$ $12 + 6 =$ $5 + 8 =$ $5 + 2 =$ $16 + 5 =$	Which numbers are less than 75? 125, 89, 54, 90, 1	How many words are in this sentence?
Show the number 50 in as many ways as you can.	How many hours are there in a day?	School starts at 9:00 AM. Lunch is at 11:00 AM. How many hours until lunch time?	$26 + 7 =$ $41 + 1 =$ $23 + 1 =$	How many kids are in your class? How many fingers in total?

JUNE - GRADE ONE

MONDAY	TUESDAY	WEDNESDAY	THURSDAY	FRIDAY
<p>Which container holds more liquid?</p> 	<p>When is your birthday? How many more days until you get to celebrate?</p>	<p>You can start driving when you are 16 years old. How many more years do you need to wait?</p>	<p>Roll two dice. Add up the amount. Repeat. Which numbers come up most often?</p>	<p>How many seconds are there in a minute?</p> <p>Can you count them?</p>
<p>What number is 6 greater than 3?</p>	<p>Order these numbers from least to greatest...</p> <p>90, 45, 78, 2, 13, 5</p>	<p>Make a spinner with 4 colours. What is the likelihood of each colour being spun?</p>	<p>5 butterflies landed on a branch. 4 more butterflies joined in. How many butterflies all together?</p>	<p>Bailey arrives home from school at 4:00 PM. She has free time until dinner at 6:00 PM. How many hours does she get to play?</p>
<p>NEVER GIVE UP</p> <p>How many letters are in the statement above?</p>	<p>$15 + 7 =$</p> <p>$12 + 8 =$</p> <p>$16 + 5 =$</p> <p>$12 + 12 =$</p>	<p>Clap the pattern</p> <p>AAABBB</p> <p>What comes next?</p>	<p>Show the number 15 in three different ways.</p>	<p>How many nickels do you need to make 25 cents?</p>
<p>There are 2 dogs, 3 cats, 6 fish, 2 lizards and 5 ferrets. How many in total?</p>	<p>Sandra has 5 friends over. She bought 25 candies. How many can each friend have?</p>	<p>Which number is greater than 65?</p> <p>1, 6, 89, 43, 34</p>	<p>Write and solve an addition story of your own.</p>	<p>Write a subtraction sentence of your own.</p>